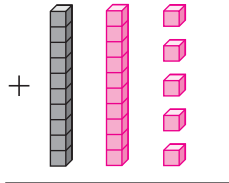
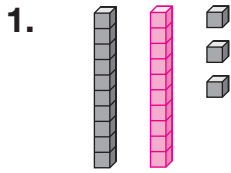


Model the Sum

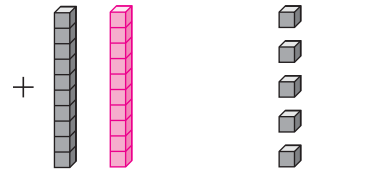
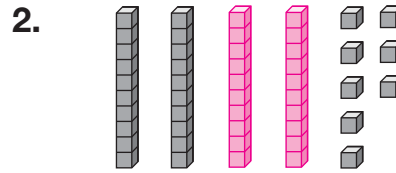
Draw the missing tens and ones for each sum.

Number Sense

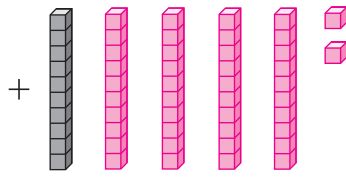
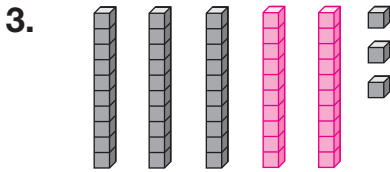
For 1-4, sample answers are given.



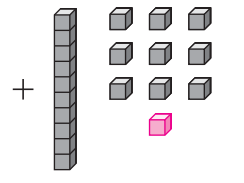
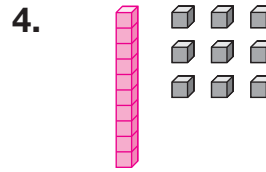
48



73



105



39

Write the missing numbers.

$$\begin{array}{r} 5. \quad \boxed{3}7 \\ + \quad 59 \\ \hline 96 \end{array}$$

$$\begin{array}{r} 6. \quad \quad 12 \\ + \quad \boxed{9}\boxed{8} \\ \hline 110 \end{array}$$

$$\begin{array}{r} 7. \quad \quad 4\boxed{3} \\ + \quad \boxed{5}2 \\ \hline 95 \end{array}$$