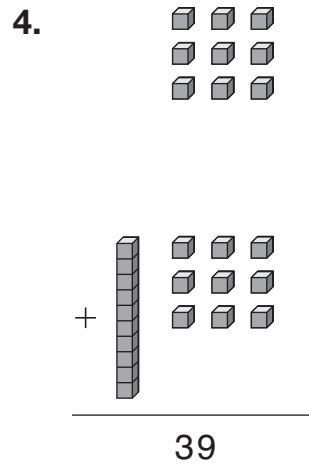
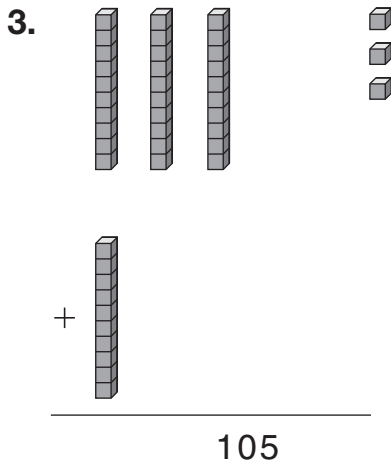
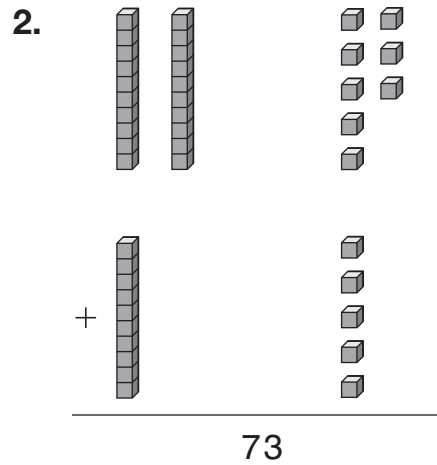
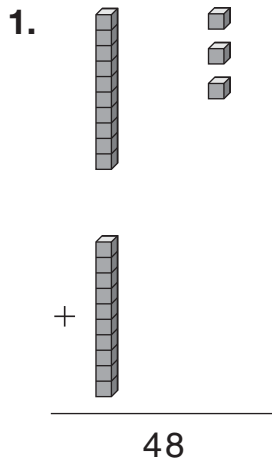


Model the Sum

Draw the missing tens and ones for each sum.

Number Sense



Write the missing numbers.

5.

$$\begin{array}{r} \square 7 \\ + 59 \\ \hline 96 \end{array}$$

6.

$$\begin{array}{r} 12 \\ + \square \square \\ \hline 110 \end{array}$$

7.

$$\begin{array}{r} 4 \square \\ + \square 2 \\ \hline 95 \end{array}$$